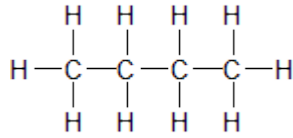
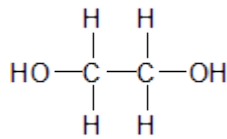


<b>Formeln und Namen organischer Verbindungen</b> <b>Schwierigkeitsgrad 1</b>
--

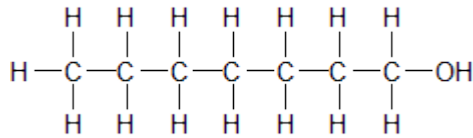
**Ordne den Strukturformeln mit Pfeilen den richtigen systematischen Namen zu.**



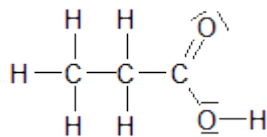
**Propansäure**



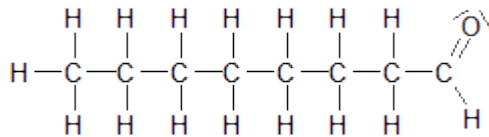
**Heptan-1-ol**



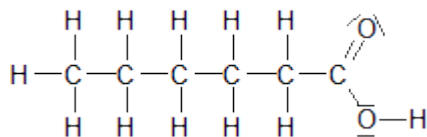
**Butan**



**Hexansäure**



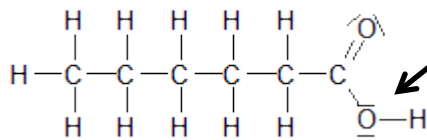
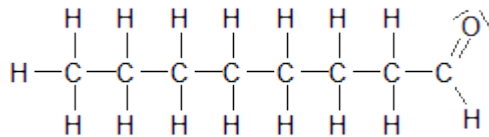
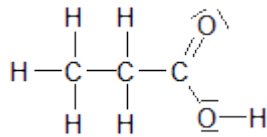
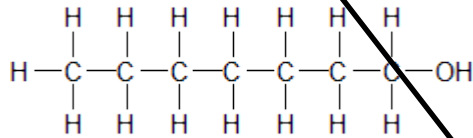
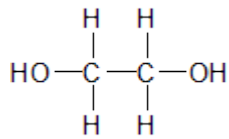
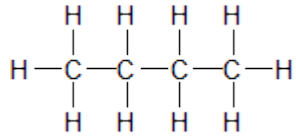
**Octanal**



**Ethandiol**

**Formeln und Namen organischer Verbindungen**  
**Lösung**

**Ordne den Strukturformeln mit Pfeilen den richtigen systematischen Namen zu.**



Propansäure

Heptan-1-ol

Butan

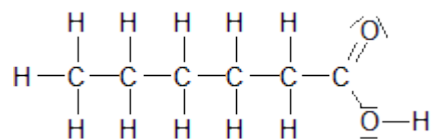
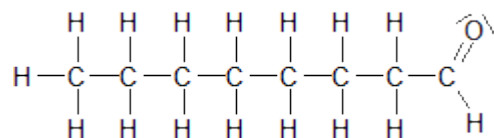
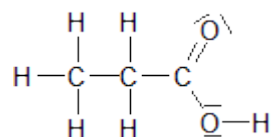
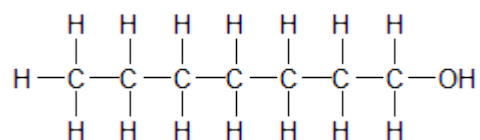
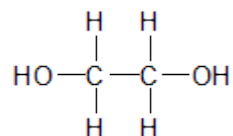
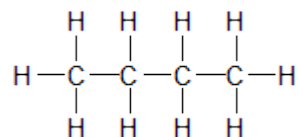
Hexansäure

Octanal

Ethandiol

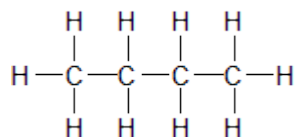
<b>Formeln und Namen organischer Verbindungen</b> <b>Schwierigkeitsgrad 2</b>
--

**Benenne die folgenden Verbindungen:**

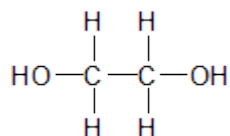


<b>Formeln und Namen organischer Verbindungen</b> <b>Schwierigkeitsgrad 2 - Lösung</b>
---

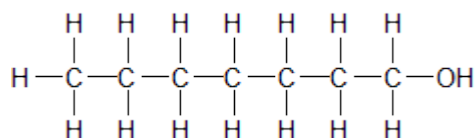
**Benenne die folgenden Verbindungen:**



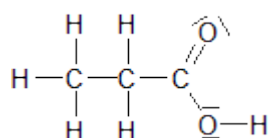
**Butan**



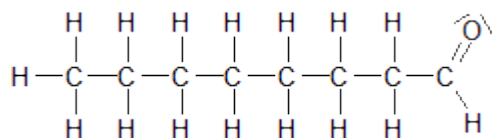
**Ethandiol**



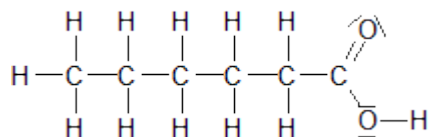
**Heptan-1-ol**



**Propansäure**



**Octanal**



**Hexansäure**